









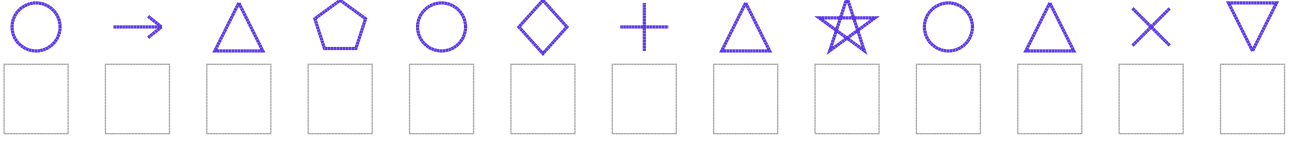


Şekil Sayı Eşleştirme

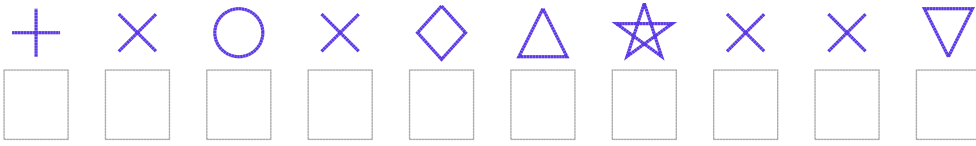
									
= 5	= 6	= 2	= 4	= 7	= 8	= 3	= 9	= 0	= 1

Aşağıdaki uzun şifreleri hatasız çözerek altlarına yazın:

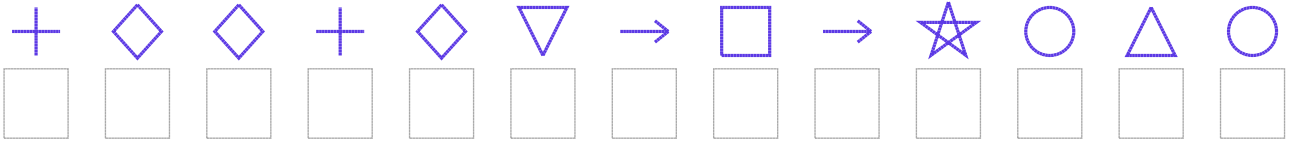
1. Şifre



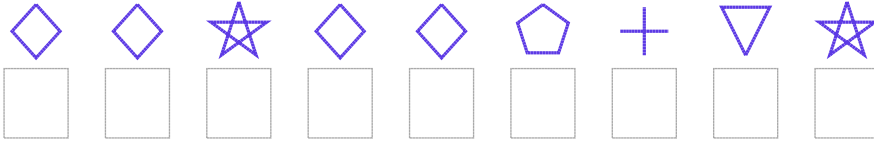
2. Şifre



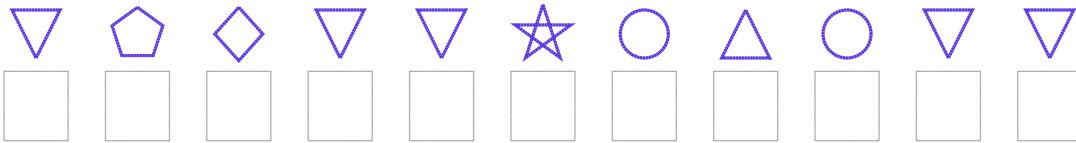
3. Şifre



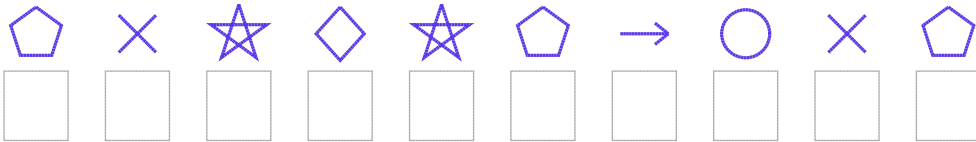
4. Şifre



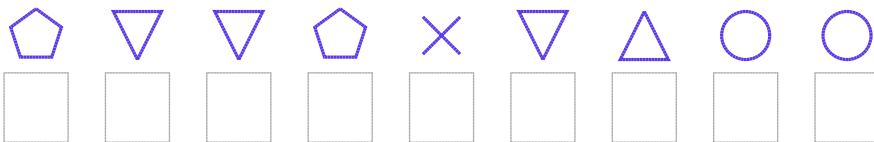
5. Şifre



6. Şifre



7. Şifre



□ BONUS: 3. ve 4. şifrenin ikinci rakamının toplamı kaçtır?

Cevap Anahtarı

1. Şifre: 8124837258260

2. Şifre: 7686325660

3. Şifre: 7337301915828

4. Şifre: 335334705

5. Şifre: 04300582800

6. Şifre: 4653541864

7. Şifre: 400460288

□ Bonus Soru Cevabı: 6